

(DO NOT OPEN THIS QUESTION BOOKLET BEFORE TIME OR UNTIL YOU ARE ASKED TO DO SO)

A

SET-Y

UG-EE-June, 2024
SUBJECT : BBA (4 Year)

10461

Sr. No.

Time : 1½ Hours

Max. Marks : 100

Total Questions : 100

Roll No. (in figures) _____ (in words) _____

Name _____ Date of Birth _____

Father's Name _____ Mother's Name _____

Date of Examination _____

(Signature of the Candidate)

(Signature of the Invigilator)

CANDIDATES MUST READ THE FOLLOWING INFORMATION/INSTRUCTIONS BEFORE STARTING THE QUESTION PAPER.

- 1. All questions are compulsory.**
- 2. The candidates *must return* the question booklet as well as OMR Answer-Sheet to the Invigilator concerned before leaving the Examination Hall, failing which a case of use of unfair-means / mis-behaviour will be registered against him / her, in addition to lodging of an FIR with the police. Further the answer-sheet of such a candidate will not be evaluated.**
- 3. Keeping in view the transparency of the examination system, carbonless OMR Sheet is provided to the candidate so that a copy of OMR Sheet may be kept by the candidate.**
- 4. Question Booklet along with answer key of all the A, B, C & D code shall be got uploaded on the University Website immediately after the conduct of Entrance Examination. Candidates may raise valid objection/complaint if any, with regard to discrepancy in the question booklet/answer key within 24 hours of uploading the same on the University Website. The complaint be sent by the students to the Controller of Examinations by hand or through email. Thereafter, no complaint in any case, will be considered.**
- 5. The candidate *must not* do any rough work or writing in the OMR Answer-Sheet. Rough work, if any, may be done in the question booklet itself. Answers *must not* be ticked in the question booklet.**
- 6. *There will be no negative marking. Each correct answer will be awarded one full mark. Cutting, erasing, overwriting and more than one answer in OMR Answer-Sheet will be treated as incorrect answer.***
- 7. Use only **Black or Blue Ball Point Pen** of good quality in the OMR Answer-Sheet.**
- 8. *Before answering the questions, the candidates should ensure that they have been supplied correct and complete booklet. Complaints, if any, regarding misprinting etc. will not be entertained 30 minutes after starting of the examination.***

UG-EE-June, 2024/(BBA-4 Yr.)(SET-Y)/(A)

SEAL

1. Synonyms of CHERISH :

- | | |
|------------|------------|
| (1) Punish | (2) Foster |
| (3) Pure | (4) Mishap |

2. Synonyms of BEWITCHING :

- | | |
|-------------|---------------|
| (1) Magical | (2) Frustrate |
| (3) Fault | (4) Bulky |

3. Antonyms of CHASTE :

- | | |
|-------------|----------------|
| (1) Lustful | (2) Honourable |
| (3) Mishap | (4) Blessing |

4. Antonyms of AWKWARD :

- | | |
|-------------|--------------|
| (1) Rough | (2) Clever |
| (3) Likable | (4) Careless |

5. I lost my passport the way to India.

- | | |
|--------|--------|
| (1) in | (2) on |
| (3) by | (4) to |

6. They are very grateful your kindness.

- | | |
|----------|-------------|
| (1) for | (2) to |
| (3) with | (4) towards |

7. Kashmir is switzerland of India.

- | | |
|--------|------------------|
| (1) a | (2) the |
| (3) an | (4) None of them |

8. There is hourly tram service on this route.

- (1) a (2) an
(3) the (4) None of them

9. May we have pleasure of your company for lunch ?

- (1) the (2) an
(3) a (4) None of them

10. Find out the part which has error :

It was evident/to me that there/was any mistake/in that account.

- (1) it was evident (2) to me that there
(3) was any mistake (4) in that account

11. Find out the part which has error :

No sooner we entered/than he got up/and left the room.

- (1) No sooner we entered
(2) than he got up
(3) and left the room
(4) No error

12. Geeta : Quran

- (1) Orange : Mango
(2) Temple : Worship
(3) Good : Man
(4) Army : Defense

13. Canvas : Painter

(1) Leather : Shoe

(2) Brush : Palette

(3) Chisel : Wood

(4) Marble : Sculptor

14. One who loves other :

(1) Altruist

(2) Aggressor

(3) Ambassador

(4) Amnesia

15. Evening prayer is a church.

(1) Vesper

(2) Verpose

(3) Venial

(4) Verbatim

16. One who believes in the existence of God.

(1) Thearchy

(2) Theist

(3) Truant

(4) Twins

17. Correct the underline : Due to these reason we all are in favour of universal compulsory education.

(1) Out of these reason

(2) For these reason

(3) By these reason

(4) No improvement

18. A thing of beauty is joy forever :
- (1) is the joy
 - (2) is joyous
 - (3) is a joy
 - (4) No improvement
19. Eve-teasing is not only a moral offence but a crime punishable under law.
- (1) as also a
 - (2) as well as a
 - (3) but also a
 - (4) No improvement
20. The students the teacher on teacher's day for twenty years of dedicated teaching.
- (1) facilitated
 - (2) felicitated
 - (3) fantasized
 - (4) fecilitated
21. A investigation can sometimes yield new facts, but typically organized ones are more successful.
- (1) meandering
 - (2) timely
 - (3) consistent
 - (4) systematic
22. After finishing high school, I plan to pursuing law.
- (1) No change
 - (2) plan to pursue
 - (3) plan in pursue
 - (4) plan for pursuing

23. He was looking in to his book, for the last two hours but couldn't find it.
- (1) looking down on his book
(2) looking above his book
(3) looking for his book
(4) looking after his book
24. If the sun, I will go swimming.
- (1) shines (2) shine
(3) will shine (4) None of the above
25. Smoking will never be given up, tobacco industry thrives.
- (1) so that (2) as long as
(3) though (4) as if
26. If 10% of an electricity bill is deducted ₹ 45 is still to be paid. How much was the bill ?
- (1) 50 (2) 40
(3) 35 (4) 54
27. Asha's income is ₹ 12,000 per month. She pays 20% tax on monthly income above ₹ 2,000 and she spends 30% of the remaining income. How much does she save ?
- (1) ₹ 70,000 (2) ₹ 60,000
(3) ₹ 84,000 (4) ₹ 50,000
28. Two successive discounts of 8% and 12% are equal to a single discount of :
- (1) 20% (2) 19.04%
(3) 20.96% (4) 22%

29. A fruit vendor gives two successive discount of 10% and 14%. What is the overall discount given ?
- (1) 22.4% (2) 22.6%
(3) 23.4% (4) 23.6%
30. If $x - \frac{1}{x} = 3$, the value of $x^3 - \frac{1}{x^3}$ is
- (1) 36 (2) 63
(3) 99 (4) None of these
31. What is the decimal form of 30% ?
- (1) 1.3 (2) 10.3
(3) 000.3 (4) 0.3
32. Simplify $\frac{27}{21}$ as a fraction in a simplest form.
- (1) $\frac{7}{9}$ (2) $\frac{9}{7}$
(3) $\frac{1}{3}$ (4) $\frac{1}{7}$
33. Sunanda is making a profit of 25% on her selling price. What is her actual profit percentage ?
- (1) $\frac{100}{3}\%$ (2) 20%
(3) 25% (4) 30%
34. By selling 33m of cloth, one gains the selling price of 11m. Find the gain percent.
- (1) 20% (2) 40%
(3) 50% (4) 22%

35. Tanu is twice as good a workman as Anubhav. Find the ratio of work done by Tanu and Anubhav.
- (1) 1 : 2 (2) 2 : 1
(3) 1 : 4 (4) 4 : 1
36. Ram can do a job in 20 days. Find his 2 days job.
- (1) $\frac{1}{20}$ (2) $\frac{1}{10}$
(3) $\frac{1}{5}$ (4) $\frac{1}{40}$
37. A can do a certain job in 12 days. B is 60% more efficient than A. The number of days, taken by B to do the same piece of work is
- (1) 6 (2) $6\frac{1}{4}$
(3) $7\frac{1}{2}$ (4) 8
38. A man is walking at a speed of 9 km/h. After every km he takes the rest of 9 min. How much time will he take to cover a distance of 27 km ?
- (1) 6 hours
(2) 6 hours 35 minutes
(3) 6 hours 45 minutes
(4) 6 hours 54 minutes
39. A train 125 m long is running at 50 km/h. In what time it will pass a man, running at 5 km/hr in the same direction in which the train is going ?
- (1) 12 seconds (2) 10 seconds
(3) 20 seconds (4) 15 seconds

40. A motor car covers a journey in 9 hours, the first half at 12 km/h and second half at 15 km/h. Find the distance.
- (1) 100 km (2) 96 km
(3) 120 km (4) 124 km
41. A 100 m long train take 9 second to cross a man walking at 5 km/h in the opposite to that of the train. Find the speed of the train.
- (1) 40 km/h (2) 30 km/h
(3) 45 km/h (4) 35 km/h
42. How many different signals can be made by 5 flags from 8 flags of different colours ?
- (1) 6270 (2) 1680
(3) 20160 (4) 6720
43. The number of 4-digit numbers which are not divisible by 5, are :
- (1) 7,200 (2) 3,600
(3) 14,400 (4) 1,800
44. Which term of sequence 7, 10, 13 is 151 ?
- (1) 29th (2) 19th
(3) 59th (4) 49th
45. The sum of 5 consecutive even numbers A, B, C, D and E is 130. What is the product of A and E ?
- (1) 720 (2) 616
(3) 660 (4) 672
46. The probability that a leap year selected at random contains 53 sundays, is :
- (1) $\frac{7}{366}$ (2) $\frac{26}{183}$
(3) $\frac{1}{7}$ (4) $\frac{2}{7}$

47. Five coins whose faces are marked 2, 3 are tossed. The chance of obtaining a total of 12 is.

(1) $\frac{1}{32}$

(2) $\frac{1}{16}$

(3) $\frac{3}{16}$

(4) $\frac{5}{16}$

48. Find the third proportional to the numbers 5 and 10.

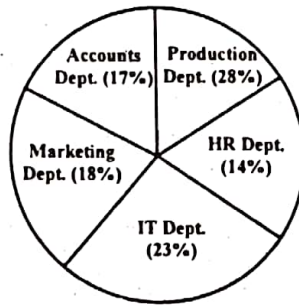
(1) 10

(2) 2.5

(3) 25

(4) 30

(For Question Nos. 49 & 50) : Percentage Break-up of Employees working in various Departments of an Organization.

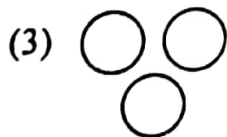
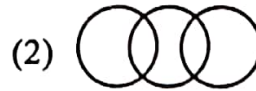


Total Number of Employees = 1,800

Ratio of Men to Women

Department	Men	Women
Production	11	1
HR	1	3
IT	5	4
Marketing	7	5
Accounts	2	7

49. What is the number of men working in the marketing Department ?
- (1) 132 (2) 174
(3) 126 (4) 189
50. What is the ratio of the number of men working in the Account Department to the total number of employees working in the Department ?
- (1) 9 : 2 (2) 7 : 6
(3) 2 : 9 (4) 6 : 7
51. P, Q, R, S and T are sitting in a line facing west. P and Q are sitting together. R is sitting at South end and. S is sitting at North end. T is neighbour of Q and R. Who is sitting in the middle ?
- (1) P (2) Q
(3) R (4) S
52. Five students are standing in a circle. Abhinav is between Alok and Ankur. Apurva is on the left of Abhishek. Alok is on the left of Apurva. Who is sitting next to Abhinav on his right ?
- (1) Apurva (2) Ankur
(3) Abhishek (4) Alok
53. Which of the following diagrams indicates the best relation between clothes, flowers and white ?



54. bc, cde, de, efg, fg, ?

- (1) ghi (2) fgh
(3) hij (4) ijk

55. What comes in place of question mark (?) in the series given below ?

P3C, R5F, T8I, V12L, ?

- (1) Y17O (2) X16M
(3) X17O (4) X16O

56. There are six members in a family. A is the father of D, E is the grand father of D. B is the daughter-in-law of C. F is the uncle of D. What is the relationship of C with F ?

- (1) Sister (2) Mother-in-law
(3) Nephew (4) Data inadequate

57. A is wife of B. D is brother of A. P and Q are the children of E, who is wife of D. How is B related to Q ?

- (1) Father (2) Grandmother
(3) Uncle (4) Father-in-law

58. If CUP = 40, then KITE = ?

- (1) 10 (2) 20
(3) 30 (4) 45

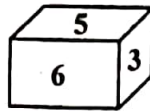
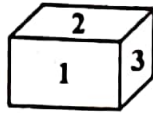
59. If BAG = 71, then VICE = ?

- (1) 69 (2) 70
(3) 75 (4) 90

60. Travelling by trains rather than cabs is more convenient and economical in Paris, Which Assumption is *correct* ?

- (1) Paris is an expensive city
- (2) Paris is a cheap city
- (3) Train services are reasonably good in paris
- (4) Train services are expensive in Paris

61. Which digit will appears on the face opposite to the face with number 4 ?



- (1) 1
- (2) 2
- (3) 3
- (4) 4

62. All flowers are Books :

All Books are Carpets.

Some Carpets are Keys.

Some Keys are Locks.

Conclusions :

- (I) Some Keys are Books.
- (II) Some Keys are Flowers.
- (III) Some Locks are Books.

- (1) Only I follows
- (2) Only II follows
- (3) Only III follows
- (4) None follows

UG-EE-June, 2024/(BBA-4 Yr.)(SET-Y)/(A)

63. All hotels are buses : Some buses are cars.

All cars are trams : Some trams are clouds.

Conclusions :

(I) Some trams are buses.

(II) Some trams are hotels.

(III) Some clouds are cars.

(1) Only I follows

(2) Only II follows

(3) Only III follows

(4) None of these

64. Who is the former Vice-President of India ?

(1) M.H. Ansari

(2) Abdul Kalam

(3) Pranab Mukherjee

(4) Dr. Rajendra Prasad

65. Find the odd one out.

(1) a

(2) b

(3) c

(4) d

66. The side of a cube is 8 cm. What is the total surface area of the cube ?

(1) 476 cm^2

(2) 384 cm^2

(3) 324 cm^2

(4) 456 cm^2

67. Three metal cubes whose edges measured 3 cm, 4 cm, and 5 cm respectively are melted to form a single cube. Find its edge.

(1) 15 cm

(2) 12 cm

(3) 6 cm

(4) 9 cm

68. Statements :

(1) All T are N

(2) No M is N

Conclusions :

(I) All T are M

(II) Some T are not M

(1) Only conclusion I follow

(2) Both conclusion follow

(3) Only conclusion II follow

(4) None of the conclusion follow

69. Statements :

(1) Some schools are houses.

(2) Some colleges are schools.

Conclusions :

(I) Some colleges are houses.

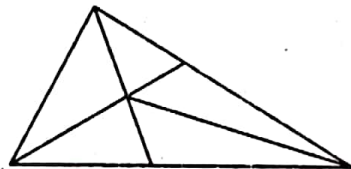
(II) Some colleges are not houses.

(1) Only conclusion I follows

(2) Only conclusion II follows

(3) Either I and II follows

(4) Neither I and II follows

70. How many triangles are there in the following figure ?

(1) 12

(2) 8

(3) 14

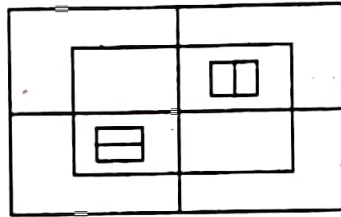
(4) 50

UG-EE-June, 2024/(BBA-4 Yr.)(SET-Y)/(A)

71. Healthy eating is crucial component of healthy aging. When should one start eating healthy ? It turns out that it is never too early. For example babies who start eating healthy in the first year are more likely to have better overall health as they get older. Which one of the following is the *correct* logical inference ?

- (1) Healthy eating is important for those with good health conditions, but not for others.
- (2) Eating healthy can be started at any age, earlier the better.
- (3) Eating healthy and better overall health are more correlated at a young age, but not older age.
- (4) Healthy eating is more important for adults than kids.

72. How many squares are there in the given picture :



- (1) 18
- (2) 14
- (3) 12
- (4) None of the above

73. There were different streams of freedom movement in colonial India carried out by the moderates, liberal, radicals, socialists and so on.

Which one of the following is the best inference play the above statement ?

- (1) The emergence of Nationalism in colonial India led to an independence.
- (2) Nationalism in India emerged in the context of colonialism.
- (3) Nationalism in India is homogenous.
- (4) Nationalism in India is heterogenous.

74. What should come next in the following series ?
987654321987654329876543987654987 ?
- (1) 5 (2) 4
(3) 6 (4) 1
75. Choose the *odd* pair :
- (1) Broad-Wide (2) Light-Heavy
(3) Tiny-Small (4) Big-Large
76. Which of the following management functions are closely related ?
- (1) planning and organising
(2) staffing and control
(3) planning and control
(4) planning and staffing
77. To become a successful team leader you must have.
- (1) decision making ability (2) support
(3) trust (4) supervision
78. Which country has blocked the popular website 'youtube' ?
- (1) China (2) Pakistan
(3) India (4) USA
79. A serious effort to tackle the problem of poverty began with :
- (1) first plan (2) third plan
(3) fourth plan (4) sixth plan

UG-EE-June, 2024/(BBA-4 Yr.)(SET-Y)/(A)

80. Which of the following is the Banker of the Banks ?
- (1) IDBI (2) SBI
(3) RBI (4) SBI and RBI
81. In India, maximum number of workers are employed in :
- (1) textile industry (2) iron and steel industry
(3) petrochemical industry (4) automobile industry
82. The standard of living in a country is represented by its :
- (1) national income (2) per capita income
(3) poverty ratio (4) unemployment ratio
83. The "God of small things" is written by :
- (1) Anita B Phalp (2) Arundhati Roy
(3) Anita Desai (4) Kiran Desai
84. "What Young India Wants" is written by :
- (1) Chetan Bhagat (2) Pawan Verma
(3) Vimal Kumar (4) Manu Joseph
85. Who is named as the Flying Sikh of India ?
- (1) Mohinder Singh (2) Ajit Pal Singh
(3) Joginder Singh (4) Milkha Singh
86. The book "It was Five Past Midnight" is on :
- (1) Bhuj Earthquake (2) Odisha Floods
(3) Andhra Cyclone (4) Bhopal Gas Tragedy

87. Who among the following is considered as the inventor of the World Wide Web (WWW) ?
- (1) Edward Kasner (2) Bill Gates
(3) Tim Berners-Lee (4) Vinod Dham
88. Which one of the following computer memory is reprogrammable and can be erased by exposing to UV-Light ?
- (1) RAM (2) EEPROM
(3) EPROM (4) PROM
89. The first newspaper published in English Language was :
- (1) The Bengal Gazette (2) The Hindu
(3) Young India (4) Native Opinion
90. Which of these International Tennis events is played on a grass court ?
- (1) US open (2) French open
(3) Wimbledon (4) Australian open
91. The first woman to scale Mount Everest was :
- (1) Arati Saha (2) Asha Agarwal
(3) Bachendri Pal (4) Reita Faria
92. Who among the following got the 'Bharat Ratna' before becoming the President of India ?
- (1) R. Venkataraman (2) Dr. Rajendra Prasad
(3) Dr. Zakir Hussain (4) V. V. Giri

UG-EE-June, 2024/(BBA-4 Yr.)(SET-Y)/(A)

93. Two smallest continents of the world are :

- (1) Australia and Antarctica
- (2) Antarctica and Europe
- (3) Australia and Europe
- (4) Australia and South America

94. India has

- (1) Socialistic economy
- (2) Gandhian economy
- (3) Mixed economy
- (4) Free economy

95. The budget is presented to the Parliament in India on :

- (1) the last day of February
- (2) 15th March
- (3) the last day of March
- (4) 18th September

96. India's first Digi Dhan Mela has been held in which state to promote cashless transactions ?

- | | |
|---------------|-------------------|
| (1) Jharkhand | (2) Uttar Pradesh |
| (3) Gujarat | (4) Haryana |

97. WTO basically promotes :

- | | |
|-----------------------|-------------------------|
| (1) Financial support | (2) Global peace |
| (3) Unilateral trade | (4) Multi-lateral trade |

UG-EE-June, 2024/(BBA-4 Yr.)(SET-Y)/(A)

P. T. O.

98. Amnesty International is a :
- (1) Human Rights Group
 - (2) UN Agency to Fight Global Terrorism
 - (3) Refugee camp in Croatia
 - (4) Wing of the World Bank
99. The first national park development in India is :
- (1) Gir
 - (2) Kaziranga
 - (3) Jim Corbett
 - (4) None of them
100. "The power of dreams" is a punchline of :
- (1) Honda
 - (2) Jaguar
 - (3) Wipro
 - (4) Toyota

(DO NOT OPEN THIS QUESTION BOOKLET BEFORE TIME OR UNTIL YOU
ARE ASKED TO DO SO)

B

UG-EE-June, 2024

SET-Y

SUBJECT : BBA (4 Year)

10346

Sr. No.

Time : 1½ Hours

Max. Marks : 100

Total Questions : 100

Roll No. (in figures) _____ (in words) _____

Name _____ Date of Birth _____

Father's Name _____ Mother's Name _____

Date of Examination _____

(Signature of the Candidate)

(Signature of the Invigilator)

**CANDIDATES MUST READ THE FOLLOWING INFORMATION/INSTRUCTIONS BEFORE
STARTING THE QUESTION PAPER.**

1. **All questions are compulsory.**
2. The candidates **must return** the question booklet as well as OMR Answer-Sheet to the Invigilator concerned before leaving the Examination Hall, failing which a case of use of unfair-means / mis-behaviour will be registered against him / her, in addition to lodging of an FIR with the police. Further the answer-sheet of such a candidate will not be evaluated.
3. Keeping in view the transparency of the examination system, carbonless OMR Sheet is provided to the candidate so that a copy of OMR Sheet may be kept by the candidate.
4. Question Booklet along with answer key of all the A, B, C & D code shall be got uploaded on the University Website immediately after the conduct of Entrance Examination. Candidates may raise valid objection/complaint if any, with regard to discrepancy in the question booklet/answer key within 24 hours of uploading the same on the University Website. The complaint be sent by the students to the Controller of Examinations by hand or through email. Thereafter, no complaint in any case, will be considered.
5. The candidate **must not** do any rough work or writing in the OMR Answer-Sheet. Rough work, if any, may be done in the question booklet itself. Answers **must not** be ticked in the question booklet.
6. **There will be no negative marking. Each correct answer will be awarded one full mark. Cutting, erasing, overwriting and more than one answer in OMR Answer-Sheet will be treated as incorrect answer.**
7. Use only **Black or Blue Ball Point Pen** of good quality in the OMR Answer-Sheet.
8. **Before answering the questions, the candidates should ensure that they have been supplied correct and complete booklet. Complaints, if any, regarding misprinting etc. will not be entertained 30 minutes after starting of the examination.**

UG-EE-June, 2024/(BBA-4 Yr.)(SET-Y)/(B)

1. In India, maximum number of workers are employed in :
 - (1) textile industry
 - (2) iron and steel industry
 - (3) petrochemical industry
 - (4) automobile industry

2. The standard of living in a country is represented by its :
 - (1) national income
 - (2) per capita income
 - (3) poverty ratio
 - (4) unemployment ratio

3. The "God of small things" is written by :
 - (1) Anita B Phalp
 - (2) Arundhati Roy
 - (3) Anita Desai
 - (4) Kiran Desai

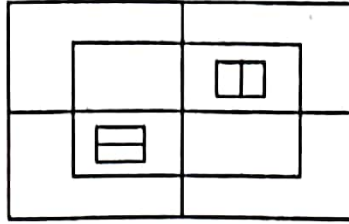
4. "What Young India Wants" is written by :
 - (1) Chetan Bhagat
 - (2) Pawan Verma
 - (3) Vimal Kumar
 - (4) Manu Joseph

5. Who is named as the Flying Sikh of India ?
 - (1) Mohinder Singh
 - (2) Ajit Pal Singh
 - (3) Joginder Singh
 - (4) Milkha Singh

6. The book "It was Five Past Midnight" is on :
 - (1) Bhuj Eartquake
 - (2) Odisha Floods
 - (3) Andhra Cyclone
 - (4) Bhopal Gas Tragedy

7. Who among the following is considered as the inventor of the World Wide Web (WWW) ?
- (1) Edward Kasner (2) Bill Gates
(3) Tim Berners-Lee (4) Vinod Dham
8. Which one of the following computer memory is reprogrammable and can be erased by exposing to UV-Light ?
- (1) RAM (2) EEPROM
(3) EPROM (4) PROM
9. The first newspaper published in English Language was :
- (1) The Bengal Gazette (2) The Hindu
(3) Young India (4) Native Opinion
10. Which of these International Tennis events is played on a grass court ?
- (1) US open (2) French open
(3) Wimbledon (4) Australian open
11. Healthy eating is crucial component of healthy aging. When should one start eating healthy ? It turns out that it is never too early. For example babies who start eating healthy in the first year are more likely to have better overall health as they get older. Which one of the following is the *correct* logical inference ?
- (1) Healthy eating is important for those with good health conditions, but not for others.
- (2) Eating healthy can be started at any age, earlier the better.
- (3) Eating healthy and better overall health are more correlated at a young age, but not older age.
- (4) Healthy eating is more important for adults than kids.

12. How many squares are there in the given picture :



- (1) 18 (2) 14
(3) 12 (4) None of the above

13. There were different streams of freedom movement in colonial India carried out by the moderates, liberal, radicals, socialists and so on.

Which one of the following is the best inference play the above statement ?

- (1) The emergence of Nationalism in colonial India led to an independence.
(2) Nationalism in India emerged in the context of colonialism.
(3) Nationalism in India is homogenous.
(4) Nationalism in India is heterogenous.

14. What should come next in the following series ?

987654321987654329876543987654987 ?

- (1) 5 (2) 4
(3) 6 (4) 1

15. Choose the *odd* pair :

- (1) Broad-Wide (2) Light-Heavy
(3) Tiny-Small (4) Big-Large

16. Which of the following management functions are closely related ?

- (1) planning and organising
- (2) staffing and control
- (3) planning and control
- (4) planning and staffing

17. To become a successful team leader you must have.

- (1) decision making ability
- (2) support
- (3) trust
- (4) supervision

18. Which country has blocked the popular website 'youtube' ?

- (1) China
- (2) Pakistan
- (3) India
- (4) USA

19. A serious effort to tackle the problem of poverty began with :

- (1) first plan
- (2) third plan
- (3) fourth plan
- (4) sixth plan

20. Which of the following is the Banker of the Banks ?

- (1) IDBI
- (2) SBI
- (3) RBI
- (4) SBI and RBI

21. The first woman to scale Mount Everest was :

- (1) Arati Saha
- (2) Asha Agarwal
- (3) Bachendri Pal
- (4) Reita Faria

22. Who among the following got the 'Bharat Ratna' before becoming the President of India ?
- (1) R. Venkataraman (2) Dr. Rajendra Prasad
(3) Dr. Zakir Hussain (4) V. V. Giri
23. Two smallest continents of the world are :
- (1) Australia and Antarctica
(2) Antarctica and Europe
(3) Australia and Europe
(4) Australia and South America
24. India has
- (1) Socialistic economy
(2) Gandhian economy
(3) Mixed economy
(4) Free economy
25. The budget is presented to the Parliament in India on :
- (1) the last day of February
(2) 15th March
(3) the last day of March
(4) 18th September
26. India's first Digi Dhan Mela has been held in which state to promote cashless transactions ?
- (1) Jharkhand (2) Uttar Pradesh
(3) Gujarat (4) Haryana

34. Antonyms of AWKWARD :

- (1) Rough (2) Clever
(3) Likable (4) Careless

35. I lost my passport the way to India.

- (1) in (2) on
(3) by (4) to

36. They are very grateful your kindness.

- (1) for (2) to
(3) with (4) towards

37. Kashmir is switzerland of India.

- (1) a (2) the
(3) an (4) None of them

38. There is hourly tram service on this route.

- (1) a (2) an
(3) the (4) None of them

39. May we have pleasure of your company for lunch ?

- (1) the (2) an
(3) a (4) None of them

40. Find out the part which has error :

It was evident/to me that there/was any mistake/in that account.

- (1) it was evident (2) to me that there
(3) was any mistake (4) in that account

27. WTO basically promotes :
- | | |
|-----------------------|-------------------------|
| (1) Financial support | (2) Global peace |
| (3) Unilateral trade | (4) Multi-lateral trade |
28. Amnesty International is a :
- (1) Human Rights Group
 - (2) UN Agency to Fight Global Terrorism
 - (3) Refugee camp in Croatia
 - (4) Wing of the World Bank
29. The first national park development in India is :
- | | |
|-----------------|------------------|
| (1) Gir | (2) Kaziranga |
| (3) Jim Corbett | (4) None of them |
30. "The power of dreams" is a punchline of :
- | | |
|-----------|------------|
| (1) Honda | (2) Jaguar |
| (3) Wipro | (4) Toyota |
31. Synonyms of CHERISH :
- | | |
|------------|------------|
| (1) Punish | (2) Foster |
| (3) Pure | (4) Mishap |
32. Synonyms of BEWITCHING :
- | | |
|-------------|---------------|
| (1) Magical | (2) Frustrate |
| (3) Fault | (4) Bulky |
33. Antonyms of CHASTE :
- | | |
|-------------|----------------|
| (1) Lustful | (2) Honourable |
| (3) Mishap | (4) Blessing |

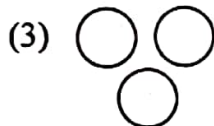
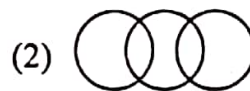
41. P, Q, R, S and T are sitting in a line facing west. P and Q are sitting together. R is sitting at South end and. S is sitting at North end. T is neighbour of Q and R. Who is sitting in the middle ?

- (1) P (2) Q
(3) R (4) S

42. Five students are standing in a circle. Abhinav is between Alok and Ankur. Apurva is on the left of Abhishek. Alok is on the left of Apurva. Who is sitting next to Abhinav on his right ?

- (1) Apurva (2) Ankur
(3) Abhishek (4) Alok

43. Which of the following diagrams indicates the best relation between clothes, flowers and white ?



44. bc, cde, de, efg, fg, ?

- (1) ghi (2) fgh
(3) hij (4) ijk

45. What comes in place of question mark (?) in the series given below ?

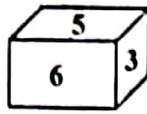
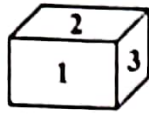
P3C, R5F, T8I, V12L, ?

- (1) Y17O (2) X16M
(3) X17O (4) X16O

UG-EE-June, 2024/(BBA-4 Yr.)(SET-Y)/(B)

46. There are six members in a family. A is the father of D, E is the grand father of D. B is the daughter-in-law of C. F is the uncle of D. What is the relationship of C with F ?
- (1) Sister (2) Mother-in-law
(3) Nephew (4) Data inadequate
47. A is wife of B. D is brother of A. P and Q are the children of E, who is wife of D. How is B related to Q ?
- (1) Father (2) Grandmother
(3) Uncle (4) Father-in-law
48. If CUP = 40, then KITE = ?
- (1) 10 (2) 20
(3) 30 (4) 45
49. If BAG = 71, then VICE = ?
- (1) 69 (2) 70
(3) 75 (4) 90
50. Travelling by trains rather than cabs is more convenient and economical in Paris. Which Assumption is *correct* ?
- (1) Paris is an expensive city
(2) Paris is a cheap city
(3) Train services are reasonably good in paris
(4) Train services are expensive in Paris

51. Which digit will appear on the face opposite to the face with number 4 ?



(1) 1

(2) 2

(3) 3

(4) 4

52. All flowers are Books :

All Books are Carpets.

Some Carpets are Keys.

Some Keys are Locks.

Conclusions :

(I) Some Keys are Books.

(II) Some Keys are Flowers.

(III) Some Locks are Books.

(1) Only I follows

(2) Only II follows

(3) Only III follows

(4) None follows

53. All hotels are buses : Some buses are cars.

All cars are trams : Some trams are clouds.

Conclusions :

(I) Some trams are buses.

(II) Some trams are hotels.

(III) Some clouds are cars.

(1) Only I follows

(2) Only II follows

(3) Only III follows

(4) None of these

UG-EE-June, 2024/(BBA-4 Yr.)(SET-Y)/(B)

54. Who is the former Vice-President of India ?

- (1) M.H. Ansari (2) Abdul Kalam
(3) Pranab Mukherjee (4) Dr. Rajendra Prasad

55. Find the odd one out.

- (1) a (2) b
(3) c (4) d

56. The side of a cube is 8 cm. What is the total surface area of the cube ?

- (1) 476 cm^2 (2) 384 cm^2
(3) 324 cm^2 (4) 456 cm^2

57. Three metal cubes whose edges measured 3 cm, 4 cm, and 5 cm respectively are melted to form a single cube. Find its edge.

- (1) 15 cm (2) 12 cm
(3) 6 cm (4) 9 cm

58. Statements :

- (1) All T are N
(2) No M is N

Conclusions :

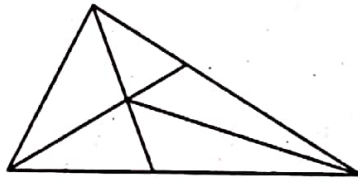
- (I) All T are M
(II) Some T are not M
(1) Only conclusion I follow (2) Both conclusion follow
(3) Only conclusion II follow (4) None of the conclusion follow

59. Statements :

- (1) Some schools are houses.
- (2) Some colleges are schools.

Conclusions :

- (I) Some colleges are houses.
 - (II) Some colleges are not houses.
- (1) Only conclusion I follows
 - (2) Only conclusion II follows
 - (3) Either I and II follows
 - (4) Neither I and II follows

60. How many triangles are there in the following figure ?

- (1) 12
- (2) 8
- (3) 14
- (4) 50

61. A investigation can sometimes yield new facts, but typically organized ones are more successful.

- (1) meandering
- (2) timely
- (3) consistent
- (4) systematic

62. After finishing high school, I plan to pursuing law.

- (1) No change
- (2) plan to pursue
- (3) plan in pursue
- (4) plan for pursuing

UG-EE-June, 2024/(BBA-4 Yr.)(SET-Y)/(B)

63. He was looking in to his book, for the last two hours but couldn't find it.
- (1) looking down on his book
(2) looking above his book
(3) looking for his book
(4) looking after his book
64. If the sun, I will go swimming.
- (1) shines (2) shine
(3) will shine (4) None of the above
65. Smoking will never be given up, tobacco industry thrives.
- (1) so that (2) as long as
(3) though (4) as if
66. If 10% of an electricity bill is deducted ₹ 45 is still to be paid. How much was the bill ?
- (1) 50 (2) 40
(3) 35 (4) 54
67. Asha's income is ₹ 12,000 per month. She pays 20% tax on monthly income above ₹ 2,000 and she spends 30% of the remaining income. How much does she save ?
- (1) ₹ 70,000 (2) ₹ 60,000
(3) ₹ 84,000 (4) ₹ 50,000
68. Two successive discounts of 8% and 12% are equal to a single discount of :
- (1) 20% (2) 19.04%
(3) 20.96% (4) 22%

69. A fruit vendor gives two successive discount of 10% and 14%. What is the overall discount given ?

- (1) 22.4% (2) 22.6%
(3) 23.4% (4) 23.6%

70. If $x - \frac{1}{x} = 3$, the value of $x^3 - \frac{1}{x^3}$ is

- (1) 36 (2) 63
(3) 99 (4) None of these

71. Find out the part which has error :

No sooner we entered/than he got up/and left the room.

- (1) No sooner we entered
(2) than he got up
(3) and left the room
(4) No error

72. Geeta : Quran

- (1) Orange : Mango
(2) Temple : Worship
(3) Good : Man
(4) Army : Defense

73. Canvas : Painter

- (1) Leather : Shoe (2) Brush : Palette
(3) Chisel : Wood (4) Marble : Sculptor

UG-EE-June, 2024/(BBA-4 Yr.)(SET-Y)/(B)

74. One who loves other :

- | | |
|----------------|---------------|
| (1) Altruist | (2) Aggressor |
| (3) Ambassador | (4) Amnesia |

75. Evening prayer is a church.

- | | |
|------------|--------------|
| (1) Vesper | (2) Verpose |
| (3) Venial | (4) Verbatim |

76. One who believes in the existence of God.

- | | |
|--------------|------------|
| (1) Thearchy | (2) Theist |
| (3) Truant | (4) Twins |

77. Correct the underline : Due to these reason we all are in favour of universal compulsory education.

- | | |
|-------------------------|----------------------|
| (1) Out of these reason | (2) For these reason |
| (3) By these reason | (4) No improvement |

78. A thing of beauty is joy forever :

- | | |
|----------------|--------------------|
| (1) is the joy | (2) is joyous |
| (3) is a joy | (4) No improvement |

79. Eve-teasing is not only a moral offence but a crime punishable under law.

- | | |
|----------------|--------------------|
| (1) as also a | (2) as well as a |
| (3) but also a | (4) No improvement |

80. The students the teacher on teacher's day for twenty years of dedicated teaching.


- | | |
|-----------------|-----------------|
| (1) facilitated | (2) felicitated |
| (3) fantasized | (4) fecilitated |

81. A 100 m long train take 9 second to cross a man walking at 5 km/h in the opposite that of the train. Find the speed of the train.
- (1) 40 km/h (2) 30 km/h
(3) 45 km/h (4) 35 km/h
82. How many different signals can be made by 5 flags from 8 flags of different colours ?
- (1) 6270 (2) 1680
(3) 20160 (4) 6720
83. The number of 4-digit numbers which are not divisble by 5, are :
- (1) 7,200 (2) 3,600
(3) 14,400 (4) 1,800
84. Which term of sequence 7, 10, 13 is 151 ?
- (1) 29th (2) 19th
(3) 59th (4) 49th
85. The sum of 5 consecutive even numbers A, B, C, D and E is 130. What is the product of A and E ?
- (1) 720 (2) 616
(3) 660 (4) 672
86. The probability that a leap year selected at random contains 53 sundays, is :
- (1) $\frac{7}{366}$ (2) $\frac{26}{183}$
(3) $\frac{1}{7}$ (4) $\frac{2}{7}$
87. Five coins whose faces are marked 2, 3 are tossed. The chance of obtaining a total of 12 is.
- (1) $\frac{1}{32}$ (2) $\frac{1}{16}$
(3) $\frac{3}{16}$ (4) $\frac{5}{16}$

88. Find the third proportional to the numbers 5 and 10.

- (1) 10 (2) 2.5
(3) 25 (4) 30

(For Question Nos. 89 & 90) : Percentage Break-up of Employees working in various Departments of an Organization.



Total Number of Employees = 1,800

Ratio of Men to Women

Department	Men	Women
Production	11	1
HR	1	3
IT	5	4
Marketing	7	5
Accounts	2	7

89. What is the number of men working in the marketing Department ?

- (1) 132 (2) 174
(3) 126 (4) 189

90. What is the ratio of the number of men working in the Account Department to the total number of employees working in the Department ?
- (1) 9 : 2
(2) 7 : 6
(3) 2 : 9
(4) 6 : 7
91. What is the decimal form of 30% ?
- (1) 1.3
(2) 10.3
(3) 000.3
(4) 0.3
92. Simplify $\frac{27}{21}$ as a fraction in a simplest form.
- (1) $\frac{7}{9}$
(2) $\frac{9}{7}$
(3) $\frac{1}{3}$
(4) $\frac{1}{7}$
93. Sunanda is making a profit of 25% on her selling price. What is her actual profit percentage ?
- (1) $\frac{100}{3}\%$
(2) 20%
(3) 25%
(4) 30%
94. By selling 33m of cloth, one gains the selling price of 11m. Find the gain percent.
- (1) 20%
(2) 40%
(3) 50%
(4) 22%

99. A train 125 m long is running at 50 km/h. In what time it will pass a man, running at 5 km/hr in the same direction in which the train is going ?

(1) 12 seconds

(2) 10 seconds

(3) 20 seconds

(4) 15 seconds

100. A motor car covers a journey in 9 hours, the first half at 12 km/h and second half at 15 km/h. Find the distance.

(1) 100 km

(2) 96 km

(3) 120 km

(4) 124 km

(DO NOT OPEN THIS QUESTION BOOKLET BEFORE TIME OR UNTIL YOU
ARE ASKED TO DO SO)

C

UG-EE-June, 2024

SET-Y

SUBJECT : BBA (4 Year)

10331

Sr. No.

Time : 1½ Hours

Max. Marks : 100

Total Questions : 100

Roll No. (in figures) _____ (in words) _____

Name _____ Date of Birth _____

Father's Name _____ Mother's Name _____

Date of Examination _____

(Signature of the Candidate)

(Signature of the Invigilator)

**CANDIDATES MUST READ THE FOLLOWING INFORMATION/INSTRUCTIONS BEFORE
STARTING THE QUESTION PAPER.**

1. **All questions are compulsory.**
2. The candidates **must return** the question booklet as well as OMR Answer-Sheet to the Invigilator concerned before leaving the Examination Hall, failing which a case of use of unfair-means / mis-behaviour will be registered against him / her, in addition to lodging of an FIR with the police. Further the answer-sheet of such a candidate will not be evaluated.
3. Keeping in view the transparency of the examination system, carbonless OMR Sheet is provided to the candidate so that a copy of OMR Sheet may be kept by the candidate.
4. Question Booklet along with answer key of all the A, B, C & D code shall be got uploaded on the University Website immediately after the conduct of Entrance Examination. Candidates may raise valid objection/complaint if any, with regard to discrepancy in the question booklet/answer key within 24 hours of uploading the same on the University Website. The complaint be sent by the students to the Controller of Examinations by hand or through email. Thereafter, no complaint in any case, will be considered.
5. The candidate **must not** do any rough work or writing in the OMR Answer-Sheet. Rough work, if any, may be done in the question booklet itself. Answers **must not** be ticked in the question booklet.
6. **There will be no negative marking. Each correct answer will be awarded one full mark. Cutting, erasing, overwriting and more than one answer in OMR Answer-Sheet will be treated as incorrect answer.**
7. Use only **Black** or **Blue Ball Point Pen** of good quality in the OMR Answer-Sheet.
8. **Before answering the questions, the candidates should ensure that they have been supplied correct and complete booklet. Complaints, if any, regarding misprinting etc. will not be entertained 30 minutes after starting of the examination.**

UG-EE-June, 2024/(BBA-4 Yr.)(SET-Y)/(C)

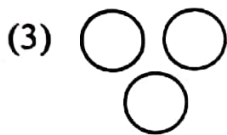
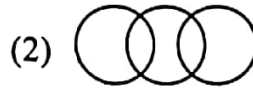
1. A investigation can sometimes yield new facts, but typically organized ones are more successful.
- (1) meandering (2) timely
(3) consistent (4) systematic
2. After finishing high school, I plan to pursuing law.
- (1) No change
(2) plan to pursue
(3) plan in pursue
(4) plan for pursuing
3. He was looking in to his book, for the last two hours but couldn't find it.
- (1) looking down on his book
(2) looking above his book
(3) looking for his book
(4) looking after his book
4. If the sun, I will go swimming.
- (1) shines (2) shine
(3) will shine (4) None of the above
5. Smoking will never be given up, tobacco industry thrives.
- (1) so that (2) as long as
(3) though (4) as if

6. If 10% of an electricity bill is deducted ₹ 45 is still to be paid. How much was the bill ?
- (1) 50 (2) 40
(3) 35 (4) 54
7. Asha's income is ₹ 12,000 per month. She pays 20% tax on monthly income above ₹ 2,000 and she spends 30% of the remaining income. How much does she save ?
- (1) ₹ 70,000 (2) ₹ 60,000
(3) ₹ 84,000 (4) ₹ 50,000
8. Two successive discounts of 8% and 12% are equal to a single discount of :
- (1) 20% (2) 19.04%
(3) 20.96% (4) 22%
9. A fruit vendor gives two successive discount of 10% and 14%. What is the overall discount given ?
- (1) 22.4% (2) 22.6%
(3) 23.4% (4) 23.6%
10. If $x - \frac{1}{x} = 3$, the value of $x^3 - \frac{1}{x^3}$ is
- (1) 36 (2) 63
(3) 99 (4) None of these
11. P, Q, R, S and T are sitting in a line facing west. P and Q are sitting together. R is sitting at South end and. S is sitting at North end. T is neighbour of Q and R. Who is sitting in the middle ?
- (1) P (2) Q
(3) R (4) S

12. Five students are standing in a circle. Abhinav is between Alok and Ankur. Apurva is on the left of Abhishek. Alok is on the left of Apurva. Who is sitting next to Abhinav on his right ?

- (1) Apurva (2) Ankur
(3) Abhishek (4) Alok

13. Which of the following diagrams indicates the best relation between clothes, flowers and white ?



14. bc, cde, de, efg, fg, ?

- (1) ghi (2) fgh
(3) hij (4) ijk

15. What comes in place of question mark.(?) in the series given below ?

P3C, R5F, T8I, V12L, ?

- (1) Y17O (2) X16M
(3) X17O (4) X16O

16. There are six members in a family. A is the father of D, E is the grand father of D, B is the daughter-in-law of C. F is the uncle of D. What is the relationship of C with F ?

- (1) Sister (2) Mother-in-law
(3) Nephew (4) Data inadequate

17. A is wife of B. D is brother of A. P and Q are the children of E, who is wife of D. How is B related to Q ?
- (1) Father (2) Grandmother
(3) Uncle (4) Father-in-law
18. If CUP = 40, then KITE = ?
- (1) 10 (2) 20
(3) 30 (4) 45
19. If BAG = 71, then VICE = ?
- (1) 69 (2) 70
(3) 75 (4) 90
20. Travelling by trains rather than cabs is more convenient and economical in Paris. Which Assumption is *correct* ?
- (1) Paris is an expensive city
(2) Paris is a cheap city
(3) Train services are reasonably good in paris
(4) Train services are expensive in Paris
21. In India, maximum number of workers are employed in :
- (1) textile industry (2) iron and steel industry
(3) petrochemical industry (4) outomobile industry
22. The standard of living in a country is represented by its :
- (1) national income (2) per capita income
(3) poverty ratio (4) unemployment ratio

23. The "God of small things" is written by :
- (1) Anita B Phalp (2) Arundhati Roy
(3) Anita Desai (4) Kiran Desai
24. "What Young India Wants" is written by :
- (1) Chetan Bhagat (2) Pawan Verma
(3) Vimal Kumar (4) Manu Joseph
25. Who is named as the Flying Sikh of India ?
- (1) Mohinder Singh (2) Ajit Pal Singh
(3) Joginder Singh (4) Milkha Singh
26. The book "It was Five Past Midnight" is on :
- (1) Bhuj Eartquake (2) Odisha Floods
(3) Andhra Cyclone (4) Bhopal Gas Tragedy
27. Who among the following is considered as the inventor of the World Wide Web (WWW) ?
- (1) Edward Kasner (2) Bill Gates
(3) Tim Berners-Lee (4) Vinod Dham
28. Which one of the following computer memory is reprogrammable and can be erased by exposing to UV-Light ?
- (1) RAM (2) EEPROM
(3) EPROM (4) PROM

29. The first newspaper published in English Language was :

- (1) The Bengal Gazette (2) The Hindu
(3) Young India (4) Native Opinion

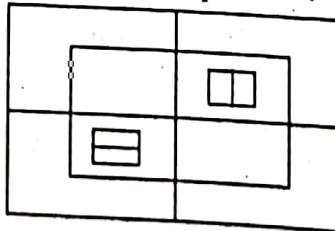
30. Which of these International Tennis events is played on a grass court ?

- (1) US open (2) French open
(3) Wimbledon (4) Australian open

31. Healthy eating is crucial component of healthy aging. When should one start eating healthy ? It turns out that it is never too early. For example babies who start eating healthy in the first year are more likely to have better overall health as they get older. Which one of the following is the *correct* logical inference ?

- (1) Healthy eating is important for those with good health conditions, but not for others.
(2) Eating healthy can be started at any age, earlier the better.
(3) Eating healthy and better overall health are more correlated at a young age, but not older age.
(4) Healthy eating is more important for adults than kids.

32. How many squares are there in the given picture :



- (1) 18 (2) 14
(3) 12 (4) None of the above

33. There were different streams of freedom movement in colonial India carried out by the moderates, liberal, radicals, socialists and so on.

Which one of the following is the best inference play the above statement ?

(1) The emergence of Nationalism in colonial India led to an independence.

(2) Nationalism in India emerged in the context of colonialism.

(3) Nationalism in India is homogenous.

(4) Nationalism in India is heterogenous.

34. What should come next in the following series ?

987654321987654329876543987654987 ?

(1) 5

(2) 4

(3) 6

(4) 1

35. Choose the *odd* pair :

(1) Broad-Wide

(2) Light-Heavy

(3) Tiny-Small

(4) Big-Large

36. Which of the following management functions are closely related ?

(1) planning and organising

(2) staffing and control

(3) planning and control

(4) planning and staffing

37. To become a successful team leader you must have.

(1) decision making ability

(2) support

(3) trust

(4) supervision

38. Which country has blocked the popular website 'youtube' ?
- (1) China (2) Pakistan
(3) India (4) USA
39. A serious effort to tackle the problem of poverty began with :
- (1) first plan (2) third plan
(3) fourth plan (4) sixth plan
40. Which of the following is the Banker of the Banks ?
- (1) IDBI (2) SBI
(3) RBI (4) SBI and RBI
41. Find out the part which has error :
- No sooner we entered/than he got up/and left the room.
- (1) No sooner we entered
(2) than he got up
(3) and left the room
(4) No error
42. Geeta : Quran
- (1) Orange : Mango
(2) Temple : Worship
(3) Good : Man
(4) Army : Defense

43. Canvas : Painter

(1) Leather : Shoe

(2) Brush : Palette

(3) Chisel : Wood

(4) Marble : Sculptor

44. One who loves other :

(1) Altruist

(2) Aggressor

(3) Ambassador

(4) Amnesia

45. Evening prayer is a church.

(1) Vesper

(2) Verpose

(3) Venial

(4) Verbatim

46. One who believes in the existence of God.

(1) Thearchy

(2) Theist

(3) Truant

(4) Twins

47. Correct the underline : Due to these reason we all are in favour of universal compulsory education.

(1) Out of these reason

(2) For these reason

(3) By these reason

(4) No improvement

48. A thing of beauty is joy forever :
- (1) is the joy
 - (2) is joyous
 - (3) is a joy
 - (4) No improvement
49. Eve-teasing is not only a moral offence but a crime punishable under law.
- (1) as also a
 - (2) as well as a
 - (3) but also a
 - (4) No improvement
50. The students the teacher on teacher's day for twenty years of dedicated teaching.
- (1) facilitated
 - (2) felicitated
 - (3) fantasized
 - (4) fecilitated
51. What is the decimal form of 30% ?
- (1) 1.3
 - (2) 10.3
 - (3) 000.3
 - (4) 0.3
52. Simplify $27/21$ as a fraction in a simplest form.
- (1) $7/9$
 - (2) $9/7$
 - (3) $1/3$
 - (4) $1/7$
53. Sunanda is making a profit of 25% on her selling price. What is her actual profit percentage ?
- (1) $\frac{100}{3}\%$
 - (2) 20%
 - (3) 25%
 - (4) 30%

54. By selling 33m of cloth, one gains the selling price of 11m. Find the gain percent.
- (1) 20% (2) 40%
(3) 50% (4) 22%
55. Tanu is twice as good a workman as Anubhav. Find the ratio of work done by Tanu and Anubhav.
- (1) 1 : 2 (2) 2 : 1
(3) 1 : 4 (4) 4 : 1
56. Ram can do a job in 20 days. Find his 2 days job.
- (1) $\frac{1}{20}$ (2) $\frac{1}{10}$
(3) $\frac{1}{5}$ (4) $\frac{1}{40}$
57. A can do a certain job in 12 days. B is 60% more efficient than A. The number of days, taken by B to do the same piece of work is
- (1) 6 (2) $6\frac{1}{4}$
(3) $7\frac{1}{2}$ (4) 8
58. A man is walking at a speed of 9 km/h. After every km he takes the rest of 9 min. How much time will he take to cover a distance of 27 km ?
- (1) 6 hours
(2) 6 hours 35 minutes
(3) 6 hours 45 minutes
(4) 6 hours 54 minutes

59. A train 125 m long is running at 50 km/h. In what time it will pass a man, running at 5 km/hr in the same direction in which the train is going ?
- (1) 12 seconds (2) 10 seconds
(3) 20 seconds (4) 15 seconds
60. A motor car covers a journey in 9 hours, the first half at 12 km/h and second half at 15 km/h. Find the distance.
- (1) 100 km (2) 96 km
(3) 120 km (4) 124 km
61. Synonyms of CHERISH :
- (1) Punish (2) Foster
(3) Pure (4) Mishap
62. Synonyms of BEWITCHING :
- (1) Magical (2) Frustrate
(3) Fault (4) Bulky
63. Antonyms of CHASTE :
- (1) Lustful (2) Honourable
(3) Mishap (4) Blessing
64. Antonyms of AWKWARD :
- (1) Rough (2) Clever
(3) Likable (4) Careless
65. I lost my passport the way to India.
- (1) in (2) on
(3) by (4) to

66. They are very grateful your kindness.

- (1) for (2) to
(3) with (4) towards

67. Kashmir is switzerland of India.

- (1) a (2) the
(3) an (4) None of them

68. There is hourly tram service on this route.

- (1) a (2) an
(3) the (4) None of them

69. May we have pleasure of your company for lunch ?

- (1) the (2) an
(3) a (4) None of them

70. Find out the part which has error :

It was evident/to me that there/was any mistake/in that account.

- (1) it was evident (2) to me that there
(3) was any mistake (4) in that account

71. A 100 m long train take 9 second to cross a man walking at 5 km/h in the opposite to that of the train. Find the speed of the train.

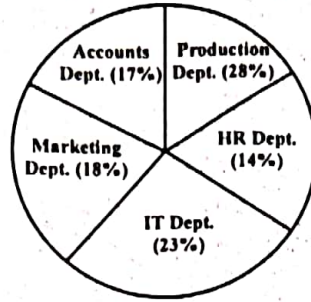
- (1) 40 km/h (2) 30 km/h
(3) 45 km/h (4) 35 km/h

72. How many different signals can be made by 5 flags from 8 flags of different colours ?
- (1) 6270 (2) 1680
(3) 20160 (4) 6720
73. The number of 4-digit numbers which are not divisible by 5, are :
- (1) 7,200 (2) 3,600
(3) 14,400 (4) 1,800
74. Which term of sequence 7, 10, 13 is 151 ?
- (1) 29th (2) 19th
(3) 59th (4) 49th
75. The sum of 5 consecutive even numbers A, B, C, D and E is 130. What is the product of A and E ?
- (1) 720 (2) 616
(3) 660 (4) 672
76. The probability that a leap year selected at random contains 53 sundays, is :
- (1) $\frac{7}{366}$ (2) $\frac{26}{183}$
(3) $\frac{1}{7}$ (4) $\frac{2}{7}$
77. Five coins whose faces are marked 2, 3 are tossed. The chance of obtaining a total of 12 is.
- (1) $\frac{1}{32}$ (2) $\frac{1}{16}$
(3) $\frac{3}{16}$ (4) $\frac{5}{16}$

78. Find the third proportional to the numbers 5 and 10.

- (1) 10 (2) 2.5
(3) 25 (4) 30

(For Question Nos. 79 & 80) : Percentage Break-up of Employees working in various Departments of an Organization.



Total Number of Employees = 1,800

Ratio of Men to Women

Department	Men	Women
Production	11	1
HR	1	3
IT	5	4
Marketing	7	5
Accounts	2	7

79. What is the number of men working in the marketing Department ?

- (1) 132 (2) 174
(3) 126 (4) 189

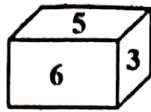
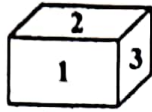
80. What is the ratio of the number of men working in the Account Department to the total number of employees working in the Department ?

- (1) 9 : 2 (2) 7 : 6
(3) 2 : 9 (4) 6 : 7

81. The first woman to scale Mount Everest was :
- (1) Arati Saha (2) Asha Agarwal
(3) Bachendri Pal (4) Reita Faria
82. Who among the following got the 'Bharat Ratna' before becoming the President of India ?
- (1) R. Venkataraman (2) Dr. Rajendra Prasad
(3) Dr. Zakir Hussain (4) V. V. Giri
83. Two smallest continents of the world are :
- (1) Australia and Antarctica
(2) Antarctica and Europe
(3) Australia and Europe
(4) Australia and South America
84. India has
- (1) Socialistic economy
(2) Gandhian economy
(3) Mixed economy
(4) Free economy
85. The budget is presented to the Parliament in India on :
- (1) the last day of February
(2) 15th March
(3) the last day of March
(4) 18th September

86. India's first Digi Dhan Mela has been held in which state to promote cashless transactions ?
- (1) Jharkhand (2) Uttar Pradesh
(3) Gujarat (4) Haryana
87. WTO basically promotes :
- (1) Financial support
(2) Global peace
(3) Unilateral trade
(4) Multi-lateral trade
88. Amnesty International is a :
- (1) Human Rights Group
(2) UN Agency to Fight Global Terrorism
(3) Refugee camp in Croatia
(4) Wing of the World Bank
89. The first national park development in India is :
- (1) Gir (2) Kaziranga
(3) Jim Corbett (4) None of them
90. "The power of dreams" is a punchline of :
- (1) Honda (2) Jaguar
(3) Wipro (4) Toyota

91. Which digit will appear on the face opposite to the face with number 4 ?



(1) 1

(2) 2

(3) 3

(4) 4

92. All flowers are Books :

All Books are Carpets.

Some Carpets are Keys.

Some Keys are Locks.

Conclusions :

(I) Some Keys are Books.

(II) Some Keys are Flowers.

(III) Some Locks are Books.

(1) Only I follows

(2) Only II follows

(3) Only III follows

(4) None follows

93. All hotels are buses : Some buses are cars.

All cars are trams : Some trams are clouds.

Conclusions :

(I) Some trams are buses.

(II) Some trams are hotels.

(III) Some clouds are cars.

(1) Only I follows

(2) Only II follows

(3) Only III follows

(4) None of these

94. Who is the former Vice-President of India ?

- (1) M.H. Ansari (2) Abdul Kalam
(3) Pranab Mukherjee (4) Dr. Rajendra Prasad

95. Find the odd one out.

- (1) a (2) b
(3) c (4) d

96. The side of a cube is 8 cm. What is the total surface area of the cube ?

- (1) 476 cm^2 (2) 384 cm^2
(3) 324 cm^2 (4) 456 cm^2

97. Three metal cubes whose edges measured 3 cm, 4 cm, and 5 cm respectively are melted to form a single cube. Find its edge.

- (1) 15 cm (2) 12 cm
(3) 6 cm (4) 9 cm

98. Statements :

- (1) All T are N
(2) No M is N

Conclusions :

- (I) All T are M
(II) Some T are not M
- (1) Only conclusion I follow (2) Both conclusion follow
(3) Only conclusion II follow (4) None of the conclusion follow

P. T. O.

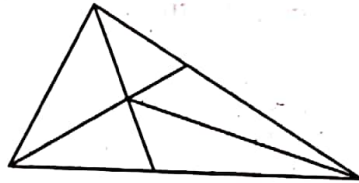
99. Statements :

- (1) Some schools are houses.
- (2) Some colleges are schools.

Conclusions :

- (I) Some colleges are houses.
 - (II) Some colleges are not houses.
- (1) Only conclusion I follows
 - (2) Only conclusion II follows
 - (3) Either I and II follows
 - (4) Neither I and II follows

100. How many triangles are there in the following figure ?



(1) 12

(3) 14

(2) 8

(4) 50

Total No. of Printed Pages : 21

(DO NOT OPEN THIS QUESTION BOOKLET BEFORE TIME OR UNTIL YOU ARE ASKED TO DO SO)

D

SET-Y

UG-EE-June, 2024

SUBJECT : BBA (4 Year)

10336

Sr. No.

Time : 1½ Hours

Max. Marks : 100

Total Questions : 100

Roll No. (in figures) _____ (In words) _____

Name _____ Date of Birth _____

Father's Name _____ Mother's Name _____

Date of Examination _____

(Signature of the Candidate)

(Signature of the Invigilator)

CANDIDATES MUST READ THE FOLLOWING INFORMATION/INSTRUCTIONS BEFORE STARTING THE QUESTION PAPER.

- 1. All questions are compulsory.**
- The candidates **must return** the question booklet as well as OMR Answer-Sheet to the Invigilator concerned before leaving the Examination Hall, failing which a case of use of unfair-means / mis-behaviour will be registered against him / her, in addition to lodging of an FIR with the police. Further the answer-sheet of such a candidate will not be evaluated.
- Keeping in view the transparency of the examination system, carbonless OMR Sheet is provided to the candidate so that a copy of OMR Sheet may be kept by the candidate.
- Question Booklet along with answer key of all the A, B, C & D code shall be got uploaded on the University Website immediately after the conduct of Entrance Examination. Candidates may raise valid objection/complaint if any, with regard to discrepancy in the question booklet/answer key within 24 hours of uploading the same on the University Website. The complaint be sent by the students to the Controller of Examinations by hand or through email. Thereafter, no complaint in any case, will be considered.
- The candidate **must not** do any rough work or writing in the OMR Answer-Sheet. Rough work, if any, may be done in the question booklet itself. Answers **must not** be ticked in the question booklet.
- There will be no negative marking. Each correct answer will be awarded one full mark. Cutting, erasing, overwriting and more than one answer in OMR Answer-Sheet will be treated as incorrect answer.**
- Use only **Black** or **Blue Ball Point Pen** of good quality in the OMR Answer-Sheet.
- Before answering the questions, the candidates should ensure that they have been supplied correct and complete booklet. Complaints, if any, regarding misprinting etc. will not be entertained 30 minutes after starting of the examination.**

UG-EE-June, 2024/(BBA-4 Yr.)(SET-Y)/(D)

SEAL

1. The first woman to scale Mount Everest was :
 - (1) Arati Saha
 - (2) Asha Agarwal
 - (3) Bachendri Pal
 - (4) Reita Faria

2. Who among the following got the 'Bharat Ratna' before becoming the President of India ?
 - (1) R. Venkataraman
 - (2) Dr. Rajendra Prasad
 - (3) Dr. Zakir Hussain
 - (4) V. V. Giri

3. Two smallest continents of the world are :
 - (1) Australia and Antarctica
 - (2) Antarctica and Europe
 - (3) Australia and Europe
 - (4) Australia and South America

4. India has
 - (1) Socialistic economy
 - (2) Gandhian economy
 - (3) Mixed economy
 - (4) Free economy

5. The budget is presented to the Parliament in India on :
 - (1) the last day of February .
 - (2) 15th March
 - (3) the last day of March
 - (4) 18th September

6. India's first Digi Dhan Mela has been held in which state to promote cashless transactions ?
- (1) Jharkhand (2) Uttar Pradesh
(3) Gujarat (4) Haryana
7. WTO basically promotes :
- (1) Financial support (2) Global peace
(3) Unilateral trade (4) Multi-lateral trade
8. Amnesty International is a :
- (1) Human Rights Group
(2) UN Agency to Fight Global Terrorism
(3) Refugee camp in Croatia
(4) Wing of the World Bank
9. The first national park development in India is :
- (1) Gir (2) Kaziranga
(3) Jim Corbett (4) None of them
10. "The power of dreams" is a punchline of :
- (1) Honda (2) Jaguar
(3) Wipro (4) Toyota
11. What is the decimal form of 30% ?
- (1) 1.3 (2) 10.3
(3) 000.3 (4) 0.3

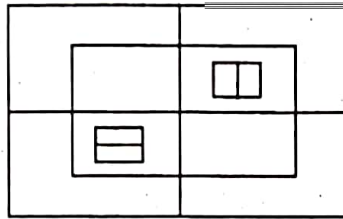
12. Simplify $\frac{27}{21}$ as a fraction in a simplest form.
- (1) $\frac{7}{9}$ (2) $\frac{9}{7}$
(3) $\frac{1}{3}$ (4) $\frac{1}{7}$
13. Sunanda is making a profit of 25% on her selling price. What is her actual profit percentage ?
- (1) $\frac{100}{3}\%$ (2) 20%
(3) 25% (4) 30%
14. By selling 33m of cloth, one gains the selling price of 11m. Find the gain percent.
- (1) 20% (2) 40%
(3) 50% (4) 22%
15. Tanu is twice as good a workman as Anubhav. Find the ratio of work done by Tanu and Anubhav.
- (1) 1 : 2
(2) 2 : 1
(3) 1 : 4
(4) 4 : 1
16. Ram can do a job in 20 days. Find his 2 days job.
- (1) $\frac{1}{20}$ (2) $\frac{1}{10}$
(3) $\frac{1}{5}$ (4) $\frac{1}{40}$

17. A can do a certain job in 12 days. B is 60% more efficient than A. The number of days, taken by B to do the same piece of work is
- (1) 6 (2) $6\frac{1}{4}$
(3) $7\frac{1}{2}$ (4) 8
18. A man is walking at a speed of 9 km/h. After every km he takes the rest of 9 min. How much time will he take to cover a distance of 27 km ?
- (1) 6 hours
(2) 6 hours 35 minutes
(3) 6 hours 45 minutes
(4) 6 hours 54 minutes
19. A train 125 m long is running at 50 km/h. In what time it will pass a man, running at 5 km/hr in the same direction in which the train is going ?
- (1) 12 seconds
(2) 10 seconds
(3) 20 seconds
(4) 15 seconds
20. A motor car covers a journey in 9 hours, the first half at 12 km/h and second half at 15 km/h. Find the distance.
- (1) 100 km
(2) 96 km
(3) 120 km
(4) 124 km

21. Healthy eating is crucial component of healthy aging. When should one start eating healthy ? It turns out that it is never too early. For example babies who start eating healthy in the first year are more likely to have better overall health as they get older. Which one of the following is the *correct* logical inference ?

- (1) Healthy eating is important for those with good health conditions, but not for others.
- (2) Eating healthy can be started at any age, earlier the better.
- (3) Eating healthy and better overall health are more correlated at a young age, but not older age.
- (4) Healthy eating is more important for adults than kids.

22. How many squares are there in the given picture :



- (1) 18
- (2) 14
- (3) 12
- (4) None of the above

23. There were different streams of freedom movement in colonial India carried out by the moderates, liberal, radicals, socialists and so on.

Which one of the following is the best inference play the above statement ?

- (1) The emergence of Nationalism in colonial India led to an independence.
- (2) Nationalism in India emerged in the context of colonialism.
- (3) Nationalism in India is homogenous.
- (4) Nationalism in India is heterogenous.

24. What should come next in the following series ?

987654321987654329876543987654987 ?

- (1) 5 (2) 4
(3) 6 (4) 1

25. Choose the *odd* pair :

- (1) Broad-Wide (2) Light-Heavy
(3) Tiny-Small (4) Big-Large

26. Which of the following management functions are closely related ?

- (1) planning and organising
(2) staffing and control
(3) planning and control
(4) planning and staffing

27. To become a successful team leader you must have.

- (1) decision making ability (2) support
(3) trust (4) supervision

28. Which country has blocked the popular website 'youtube' ?

- (1) China (2) Pakistan
(3) India (4) USA

29. A serious effort to tackle the problem of poverty began with :

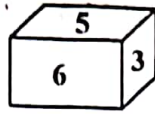
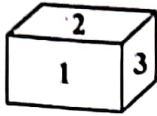
- (1) first plan (2) third plan
(3) fourth plan (4) sixth plan

UG-EE-June, 2024/(BBA-4 Yr.)(SET-Y)/(D)

30. Which of the following is the Banker of the Banks ?
- (1) IDBI (2) SBI
(3) RBI (4) SBI and RBI
31. A investigation can sometimes yield new facts, but typically organized ones are more successful.
- (1) meandering (2) timely
(3) consistent (4) systematic
32. After finishing high school, I plan to pursuing law.
- (1) No change
(2) plan to pursue
(3) plan in pursue
(4) plan for pursuing
33. He was looking in to his book, for the last two hours but couldn't find it.
- (1) looking down on his book
(2) looking above his book
(3) looking for his book
(4) looking after his book
34. If the sun, I will go swimming.
- (1) shines (2) shine
(3) will shine (4) None of the above

35. Smoking will never be given up, tobacco industry thrives.
- (1) so that (2) as long as
(3) though (4) as if
36. If 10% of an electricity bill is deducted ₹ 45 is still to be paid. How much was the bill ?
- (1) 50 (2) 40
(3) 35 (4) 54
37. Asha's income is ₹ 12,000 per month. She pays 20% tax on monthly income above ₹ 2,000 and she spends 30% of the remaining income. How much does she save ?
- (1) ₹ 70,000 (2) ₹ 60,000
(3) ₹ 84,000 (4) ₹ 50,000
38. Two successive discounts of 8% and 12% are equal to a single discount of :
- (1) 20% (2) 19.04%
(3) 20.96% (4) 22%
39. A fruit vendor gives two successive discount of 10% and 14%. What is the overall discount given ?
- (1) 22.4% (2) 22.6%
(3) 23.4% (4) 23.6%
40. If $x - \frac{1}{x} = 3$, the value of $x^3 - \frac{1}{x^3}$ is
- (1) 36 (2) 63
(3) 99 (4) None of these

41. Which digit will appear on the face opposite to the face with number 4 ?



- (1) 1 (2) 2
(3) 3 (4) 4

42. All flowers are Books :

All Books are Carpets.

Some Carpets are Keys.

Some Keys are Locks.

Conclusions :

(I) Some Keys are Books.

(II) Some Keys are Flowers.

(III) Some Locks are Books.

- (1) Only I follows (2) Only II follows
(3) Only III follows (4) None follows

43. All hotels are buses : Some buses are cars.

All cars are trams : Some trams are clouds.

Conclusions :

(I) Some trams are buses.

(II) Some trams are hotels.

(III) Some clouds are cars.

- (1) Only I follows (2) Only II follows
(3) Only III follows (4) None of these

44. Who is the former Vice-President of India ?

- (1) M.H. Ansari (2) Abdul Kalam
(3) Pranab Mukherjee (4) Dr. Rajendra Prasad

45. Find the odd one out.

- (1) a (2) b
(3) c (4) d

46. The side of a cube is 8 cm. What is the total surface area of the cube ?

- (1) 476 cm^2 (2) 384 cm^2
(3) 324 cm^2 (4) 456 cm^2

47. Three metal cubes whose edges measured 3 cm, 4 cm, and 5 cm respectively are melted to form a single cube. Find its edge.

- (1) 15 cm (2) 12 cm
(3) 6 cm (4) 9 cm

48. Statements :

- (1) All T are N
(2) No M is N

Conclusions :

- (I) All T are M
(II) Some T are not M
- (1) Only conclusion I follow (2) Both conclusion follow
(3) Only conclusion II follow (4) None of the conclusion follow

49. Statements :

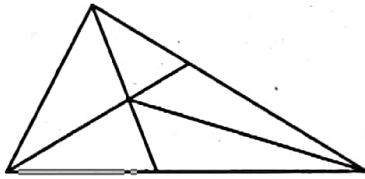
- (1) Some schools are houses.
- (2) Some colleges are schools.

Conclusions :

- (I) Some colleges are houses.
- (II) Some colleges are not houses.

- (1) Only conclusion I follows
- (2) Only conclusion II follows
- (3) Either I and II follows
- (4) Neither I and II follows

50. How many triangles are there in the following figure ?



- (1) 12
- (2) 8
- (3) 14
- (4) 50

51. In India, maximum number of workers are employed in :

- (1) textile industry
- (2) iron and steel industry
- (3) petrochemical industry
- (4) automobile industry

52. The standard of living in a country is represented by its :

- (1) national income
- (2) per capita income
- (3) poverty ratio
- (4) unemployment ratio

53. The "God of small things" is written by :
- (1) Anita B Phalp (2) Arundhati Roy
(3) Anita Desai (4) Kiran Desai
54. "What Young India Wants" is written by :
- (1) Chetan Bhagat (2) Pawan Verma
(3) Vimal Kumar (4) Manu Joseph
55. Who is named as the Flying Sikh of India ?
- (1) Mohinder Singh (2) Ajit Pal Singh
(3) Joginder Singh (4) Milkha Singh
56. The book "It was Five Past Midnight" is on :
- (1) Bhuj Eartquake (2) Odisha Floods
(3) Andhra Cyclone (4) Bhopal Gas Tragedy
57. Who among the following is considered as the inventor of the World Wide Web (WWW) ?
- (1) Edward Kasner (2) Bill Gates
(3) Tim Berners-Lee (4) Vinod Dham
58. Which one of the following computer memory is reprogrammable and can be erased by exposing to UV-Light ?
- (1) RAM (2) EEPROM
(3) EPROM (4) PROM
59. The first newspaper published in English Language was :
- (1) The Bengal Gazette (2) The Hindu
(3) Young India (4) Native Opinion

60. Which of these International Tennis events is played on a grass court ?
- (1) US open (2) French open
(3) Wimbledon (4) Australian open
61. A 100 m long train take 9 second to cross a man walking at 5 km/h in the opposite to that of the train. Find the speed of the train.
- (1) 40 km/h (2) 30 km/h
(3) 45 km/h (4) 35 km/h
62. How many different signals can be made by 5 flags from 8 flags of different colours ?
- (1) 6270 (2) 1680
(3) 20160 (4) 6720
63. The number of 4-digit numbers which are not divisble by 5, are :
- (1) 7,200 (2) 3,600
(3) 14,400 (4) 1,800
64. Which term of sequence 7, 10, 13 is 151 ?
- (1) 29th (2) 19th
(3) 59th (4) 49th
65. The sum of 5 consecutive even numbers A, B, C, D and E is 130. What is the product of A and E ?
- (1) 720 (2) 616
(3) 660 (4) 672
66. The probability that a leap year selected at random contains 53 sundays, is :
- (1) $\frac{7}{366}$ (2) $\frac{26}{183}$
(3) $\frac{1}{7}$ (4) $\frac{2}{7}$

67. Five coins whose faces are marked 2, 3 are tossed. The chance of obtaining a total of 12 is.

(1) $\frac{1}{32}$

(2) $\frac{1}{16}$

(3) $\frac{3}{16}$

(4) $\frac{5}{16}$

68. Find the third proportional to the numbers 5 and 10.


(1) 10

(2) 2.5

(3) 25

(4) 30

(For Question Nos. 69 & 70) : Percentage Break-up of Employees working in various Departments of an Organization.

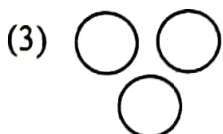
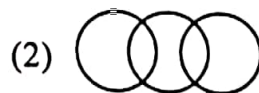


Total Number of Employees = 1,800

Ratio of Men to Women

Department	Men	Women
Production	11	1
HR	1	3
IT	5	4
Marketing	7	5
Accounts	2	7

69. What is the number of men working in the marketing Department ?
- (1) 132 (2) 174
(3) 126 (4) 189
70. What is the ratio of the number of men working in the Account Department to the total number of employees working in the Department ?
- (1) 9 : 2 (2) 7 : 6
(3) 2 : 9 (4) 6 : 7
71. P, Q, R, S and T are sitting in a line facing west. P and Q are sitting together. R is sitting at South end and. S is sitting at North end. T is neighbour of Q and R. Who is sitting in the middle ?
- (1) P (2) Q
(3) R (4) S
72. Five students are standing in a circle. Abhinav is between Alok and Ankur. Apurva is on the left of Abhishek. Alok is on the left of Apurva. Who is sitting next to Abhinav on his right ?
- (1) Apurva (2) Ankur
(3) Abhishek (4) Alok
73. Which of the following diagrams indicates the best relation between clothes, flowers and white ?



74. bc, cde, de, efg, fg, ?

(1) ghi

(2) fgh

(3) hij

(4) ijk

75. What comes in place of question mark (?) in the series given below ?

P3C, R5F, T8I, V12L, ?

(1) Y17O

(2) X16M

(3) X17O

(4) X16O

76. There are six members in a family. A is the father of D, E is the grand father of D. B is the daughter-in-law of C, F is the uncle of D. What is the relationship of C with F ?

(1) Sister

(2) Mother-in-law

(3) Nephew

(4) Data inadequate

77. A is wife of B. D is brother of A. P and Q are the children of E, who is wife of D. How is B related to Q ?

(1) Father

(2) Grandmother

(3) Uncle

(4) Father-in-law

78. If CUP = 40, then KITE = ?

(1) 10

(2) 20

(3) 30

(4) 45

79. If BAG = 71, then VICE = ?

(1) 69

(2) 70

(3) 75

(4) 90

80. Travelling by trains rather than cabs is more convenient and economical in Paris. Which Assumption is *correct* ?

- (1) Paris is an expensive city
- (2) Paris is a cheap city
- (3) Train services are reasonably good in paris
- (4) Train services are expensive in Paris

81. Synonyms of CHERISH :

- (1) Punish
- (2) Foster
- (3) Pure
- (4) Mishap

82. Synonyms of BEWITCHING :

- (1) Magical
- (2) Frustrate
- (3) Fault
- (4) Bulky

83. Antonyms of CHASTE :

- (1) Lustful
- (2) Honourable
- (3) Mishap
- (4) Blessing

84. Antonyms of AWKWARD :

- (1) Rough
- (2) Clever
- (3) Likable
- (4) Careless

85. I lost my passport the way to India.

- (1) in
- (2) on
- (3) by
- (4) to

86. They are very grateful your kindness.

- (1) for (2) to
(3) with (4) towards

87. Kashmir is switzerland of India.

- (1) a (2) the
(3) an (4) None of them

88. There is hourly tram service on this route.

- (1) a (2) an
(3) the (4) None of them

89. May we have pleasure of your company for lunch ?

- (1) the (2) an
(3) a (4) None of them

90. Find out the part which has error :

It was evident/to me that there/was any mistake/in that account.

- (1) it was evident (2) to me that there
(3) was any mistake (4) in that account

91. Find out the part which has error :

No sooner we entered/than he got up/and left the room.

- (1) No sooner we entered
(2) than he got up
(3) and left the room
(4) No error

92. Geeta : Quran

- (1) Orange : Mango
- (2) Temple : Worship
- (3) Good : Man
- (4) Army : Defense

93. Canvas : Painter

- (1) Leather : Shoe
- (2) Brush : Palette
- (3) Chisel : Wood
- (4) Marble : Sculptor

94. One who loves other :

- (1) Altruist
- (2) Aggressor
- (3) Ambassador
- (4) Amnesia

95. Evening prayer is a church.

- (1) Vesper
- (2) Verpose
- (3) Venial
- (4) Verbatim

96. One who believes in the existence of God.

- (1) Thearchy
- (2) Theist
- (3) Truant
- (4) Twins

97. Correct the underline : Due to these reason we all are in favour of universa compulsory education.
- (1) Out of these reason
 - (2) For these reason
 - (3) By these reason
 - (4) No improvement
98. A thing of beauty is joy forever :
- (1) is the joy
 - (2) is joyous
 - (3) is a joy
 - (4) No improvement
99. Eve-teasing is not only a moral offence but a crime punishable under law.
- | | |
|----------------|--------------------|
| (1) as also a | (2) as well as a |
| (3) but also a | (4) No improvement |
100. The students the teacher on teacher's day for twenty years of dedicatet teaching.
- | | |
|-----------------|-----------------|
| (1) facilitated | (2) felicitated |
| (3) fantasized | (4) fecilitated |

Answer keys of Bachelor of Business Administration (BBA) 4-Years entrance exam dated 21.06.2024

Q. NO.	A	B	C	D
1	2	1	1	3
2	1	2	2	3
3	1	2	3	3
4	2	1	1	3
5	2	4	2	1
6	1	4	1	4
7	2	3	3	4
8	2	3	2	1
9	1	1	2	3
10	3	3	1	1
11	1	2	2	4
12	1	3	3	2
13	4	4	2	1
14	1	3	1	3
15	1	2	3	2
16	2	2	4	2
17	2	1	3	3
18	3	1	4	4
19	2	3	1	2
20	2	3	3	3
21	1	3	1	2
22	2	3	2	3
23	3	3	2	4
24	1	3	1	3
25	2	1	4	2
26	1	4	4	2
27	3	4	3	1
28	2	1	3	1
29	2	3	1	3
30	1	1	3	3
31	4	2	2	1
32	2	1	3	2
33	1	1	4	3
34	3	2	3	1
35	2	2	2	2
36	2	1	2	1
37	3	2	1	3
38	4	2	1	2
39	2	1	3	2
40	3	3	3	1
41	4	2	1	4
42	4	3	1	4
43	1	2	4	1
44	4	1	1	1
45	3	3	1	1
46	4	4	2	2
47	4	3	2	3
48	1	4	3	3
49	4	1	2	4
50	3	3	2	1

[Signature]
21/06/24


[Signature]
21/06/24
Page 1 of 2

[Signature]
21/6/24

[Signature]
21/6/2024

Answer keys of Bachelor of Business Administration (BBA) 4-Years entrance exam dated 21.06.2024

Q. NO.	A	B	C	D
51	2	4	4	1
52	3	4	2	2
53	2	1	1	2
54	1	1	3	1
55	3	1	2	4
56	4	2	2	4
57	3	3	3	3
58	4	3	4	3
59	1	4	2	1
60	3	1	3	3
61	4	1	2	4
62	4	2	1	4
63	1	3	1	1
64	1	1	2	4
65	1	2	2	3
66	2	1	1	4
67	3	3	2	4
68	3	2	2	1
69	4	2	1	4
70	1	1	3	3
71	2	1	4	2
72	3	1	4	3
73	4	4	1	2
74	3	1	4	1
75	2	1	3	3
76	2	2	4	4
77	1	2	4	3
78	1	3	1	4
79	3	2	4	1
80	3	2	3	3
81	1	4	3	2
82	2	4	3	1
83	2	1	3	1
84	1	4	3	2
85	4	3	1	2
86	4	4	4	1
87	3	4	4	2
88	3	1	1	2
89	1	4	3	1
90	3	3	1	3
91	3	4	4	1
92	3	2	4	1
93	3	1	1	4
94	3	3	1	1
95	1	2	1	1
96	4	2	2	2
97	4	3	3	2
98	1	4	3	3
99	3	2	4	2
100	1	3	1	2



 21/06/24
 Page 2 of 2

Extra
 21/6/24



 21/6/2024